




Activity 3

PLAY BALL, CHARLIE BROWN!

Charlie Brown and the Peanuts gang have just finished playing a baseball game. Can you tell how they did? Look at the chart and then answer the questions below.

| Player | Balls | Strikes | Hits |
|--|-------|---------|------|
|  CHARLIE BROWN | 5 | 9 | 0 |
|  SNOOPY | 4 | 5 | 2 |
|  LUCY | 7 | 6 | 1 |

How many hits did Charlie Brown, Lucy, and Snoopy have altogether? _____

How many more balls did Lucy have than Charlie Brown? _____

How many strikes did Snoopy and Charlie Brown have altogether? _____

How many more strikes than balls did Charlie Brown have? Write the number sentence:

CELEBRATE SPRING WITH THE PEANUTS GANG!